
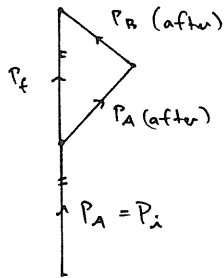
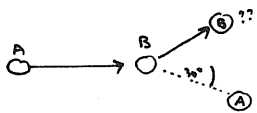


22.  Take the velocity vectors as the distance between 3 images (as above)

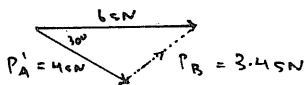


By measurement $\vec{P}_i = \vec{P}_f$
 \therefore The law holds.

23.



$P_A = P_B = 2.0 \times 3.0 = 6.5 \text{ N} \rightarrow$
 $\therefore P_f = 6.0 \text{ N} \rightarrow$



$P_B = 3.4 \text{ N} = mV$
 $\therefore 3.4 = 3.0 \times V$
 $\therefore V = \frac{3.4}{3.0}$
 $V = 1.13 \text{ ms}^{-1}$

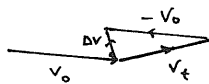
24.

(1) No. It is moving with constant speed in a straight line \therefore not accelerating \therefore no force

(2) Use the velocity vector as the distance between 3 images

$\vec{P}_A = 3 \text{ m} \times 2 = 6 \text{ m}$
 $\vec{P}_B = m \times 2.3 = 2.3 \text{ m}$
 \therefore A has the biggest momentum


(3)



$\therefore \Delta V = V_t - V_0$


(4)

Before collision



after collision

$P_A' = 3 \text{ m} \times 1.8 = 5.4 \text{ m}$
 $P_B' = m \times 2.7 = 2.7 \text{ m}$



Momentum is conserved.

1. (1) Coulombic force

$\therefore F = \frac{1}{4\pi\epsilon_0} \frac{q_1 q_2}{d^2}$

$\therefore F = \frac{9 \times 10^9 \times 1.44 \times 10^{-6} \times 2.0 \times 10^{-6}}{(1.2)^2}$

$F = 0.018 \text{ N attraction.}$

(2) (a) $F \propto \frac{1}{d^2}$

\therefore double distance, $\frac{1}{4}$ the force.

$F_{\text{new}} = 0.0045 \text{ N}$

(b) 0.30 m is $\frac{1}{4}$ distance

$\therefore F$ is 16 times the size

$F = 16 \times 0.018$

$= 0.288 \text{ N}$

(c) Same magnitude force now repulsion.

(3) Equal and opposite forces as per Newton's Third law.

(4) as $F = ma$, need the mass of q_2

2. (1) $F = \frac{1}{4\pi\epsilon_0} \frac{q_1 q_2}{d^2}$

$F = \frac{9 \times 10^9 \times 1.6 \times 10^{-19} \times 1.6 \times 10^{-19}}{(5.32 \times 10^{-11})^2}$

$F = 8 \times 10^{-8} \text{ Newtons.}$

(2) The attraction force is a centripetal force.

$\therefore F = \frac{mv^2}{r}$

$\therefore 8 \times 10^{-8} = \frac{9.11 \times 10^{-31} \times v^2}{5.32 \times 10^{-11}}$

$\therefore v = \sqrt{\frac{8 \times 10^{-8} \times 5.32 \times 10^{-11}}{9.11 \times 10^{-31}}}$

$v = 2.2 \times 10^6 \text{ ms}^{-1}$

3. (1) $F \propto \frac{1}{d^2}$

\therefore double distance, $\frac{1}{4}$ the force.

$\therefore F_{\text{new}} = \frac{6.0 \times 10^{-7}}{4}$
 $= 1.5 \times 10^{-7} \text{ N}$

(2) $3.6 \times 10^{-6} \text{ N}$ is 6 times the force.

$\therefore \frac{F}{R} = \frac{d_1^2}{d_2^2}$

$\therefore \frac{F}{6R} = \frac{d_1^2}{d_2^2}$

$\therefore d_1^2 = 6 d_2^2$

$\therefore d_1 = \sqrt{6} d_2$

\therefore new distance = $\frac{10}{\sqrt{6}}$
 $= 4.1 \text{ cm}$

(3) $F \propto q_1 q_2$

\therefore double one charge will double the force

$\therefore F_2 = 1.2 \times 10^{-6} \text{ N}$

4. $F = \frac{1}{4\pi\epsilon_0} \frac{q_1 q_2}{d^2}$

$1.0 \times 10^{-6} = \frac{9 \times 10^9 \times 2.0 \times 10^{-6} \times 6.0 \times 10^{-6}}{d^2}$

$\therefore d = \sqrt{\frac{9 \times 10^9 \times 2 \times 10^{-6} \times 6 \times 10^{-6}}{1.0 \times 10^{-6}}}$

$d = 328 \text{ m.}$

5. Force between A & C

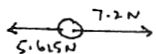
$F = \frac{1}{4\pi\epsilon_0} \frac{q_1 q_2}{d^2}$

$F = \frac{9 \times 10^9 \times 20 \times 10^{-6} \times 19 \times 10^{-6}}{(0.5)^2}$

$F = 7.2 \text{ N repulsion.}$

Force between B & C
 $F = \frac{q \times 10^9 \times 10 \times 10^{-6} \times 10 \times 10^{-6}}{(0.4)^2}$
 $F = 5.625 \text{ N repulsion}$

∴ resultant force on C



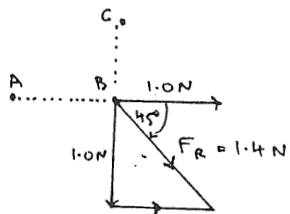
∴ $F_R = 1.575 \text{ N}$ towards B.

6. Force between A & B

$F = \frac{1}{4\pi\epsilon_0} \frac{q_1 q_2}{d^2}$
 $= \frac{9 \times 10^9 \times (2 \times 10 \times 10^{-6})^2}{(2)^2}$
 $= 1.0 \text{ Newton repulsion}$

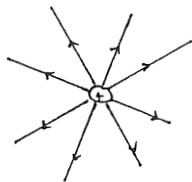
Force between B & C
 $= 1.0 \text{ N repulsion}$

∴ Resultant force on B



Resultant force on B = 1.4 N
 at 45° as shown.

7(1)



$E_3 = \frac{1}{4\pi\epsilon_0} \frac{q_1}{d^2} = \frac{9 \times 10^9 \times 0.5}{(3)^2}$
 $E_1 = 5.0 \times 10^{10} \text{ Nc}^{-1}$ outwards

(2) 90 cm is 3 times the distance.
 As $E \propto \frac{1}{d^2}$, the field at
 90 cm will be $\frac{1}{9}$ th E_1

∴ $E_2 = 5.5 \times 10^9 \text{ Nc}^{-1}$ →

(3) 10 cm is $\frac{1}{3}$ distance

∴ E_3 is 9 times E_1

$E_3 = 4.5 \times 10^{10} \text{ Nc}^{-1}$ outwards.

8. (1) $\vec{E} = \frac{1}{4\pi\epsilon_0} \frac{q_1}{d^2}$

$\vec{E}_1 = \frac{9 \times 10^9 \times 1.1 \times 10^{-8}}{(0.25)^2}$

$\vec{E}_1 = 2475 \text{ Nc}^{-1}$ outwards.


(2) $\vec{F} = \vec{E}q$

∴ $F = 2475 \times 1.6 \times 10^{-19}$

$F = 3.96 \times 10^{-16} \text{ N}$
 attraction.

(3) $F = 3.96 \times 10^{-16} \text{ N}$
 repulsion.

9. (1)



Electric field strength at M
 due to q_1

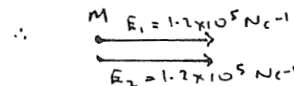
$\vec{E} = \frac{1}{4\pi\epsilon_0} \frac{q_1}{d^2}$
 $= \frac{9 \times 10^9 \times 3.0 \times 10^{-7}}{(0.15)^2}$

$E_1 = 1.2 \times 10^5 \text{ Nc}^{-1}$ →

Electric field strength at M
 due to q_2

$E_2 = 1.2 \times 10^5 \text{ Nc}^{-1}$ →

4(1) Vector addition of the
 two fields gives the
 resultant field strength at M



∴ $\vec{E}_{\text{resultant}} = 2.4 \times 10^5 \text{ Nc}^{-1}$
 towards q_2

9(2) $\vec{F} = \vec{E}q$ [Hc^{2+}]

∴ $F = 2.4 \times 10^5 \times 3.2 \times 10^{-19}$

$F = 7.68 \times 10^{-14} \text{ N}$ towards
 q_2

10. (1)

Magnitude of the
 electric field at X due to A

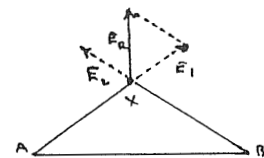
$E_1 = \frac{1}{4\pi\epsilon_0} \frac{q_1}{d^2} = \frac{9 \times 10^9 \times 2 \times 10^{-6}}{(2.83)^2}$

$E_1 = 2.25 \times 10^5 \text{ Nc}^{-1}$

Similarly E_2 due to B at X
 is $E_2 = 2.25 \times 10^5 \text{ Nc}^{-1}$

Vector addition gives the
 resultant field at X.

Scale: $1 \text{ cm} \equiv 1 \times 10^5 \text{ Nc}^{-1}$



\vec{E}_R (by scale diagram)

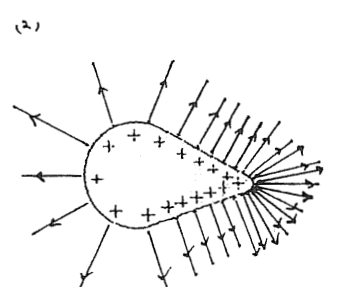
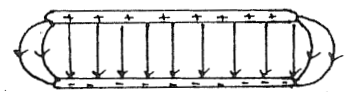
$= 3.18 \times 10^5 \text{ Nc}^{-1}$
 perpendicular to the line between
 A & B.

(2) $F = Eq$
 $= 3.18 \times 10^5 \times 1.6 \times 10^{-19}$
 $\vec{F} = 5.09 \times 10^{-14} \text{ N}$ in the
 direction of the resultant
 field.

11. The strength of the field
 is shown by the number of
 field lines in an area.
 more field lines ⇒ stronger
 field.

The direction of the field
 is shown by the arrows
 on the lines.

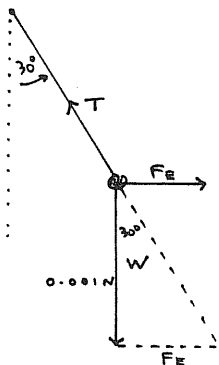
12.



(3) See text.
 13(1) See text
 (2) See text.

14. (1) towards the left.
 (2) Field lines radiate from positive to negative.
 \therefore if the small charge is attracted to the right it must be negative.

(3)



(4) From the vector force diagram

$$\tan 30^\circ = \frac{F_E}{0.001}$$

$$\therefore F_E = 0.001 \tan 30^\circ$$

$$\therefore F_E = 0.0006 \text{ N}$$

(5) $\vec{F} = \vec{E}q$

$$\therefore 0.006 = \vec{E} \times 3.0 \times 10^{-6}$$

$$\therefore \vec{E} = \frac{0.006}{3.0 \times 10^{-6}}$$

$$\vec{E} = 2 \times 10^3 \text{ N C}^{-1}$$

1. (1) See text
 (2) $w \cdot d = F \times \text{distance}$
 $= \vec{E}q \cdot d$
 $= 2500 \times 2 \times 10^{-3} \times 0.1$
 $= 0.5 \text{ J}$

2. (1) $w \cdot d = \Delta V_q$
 $= 800 \times 1.6 \times 10^{-19}$
 $= 1.28 \times 10^{-16} \text{ J}$

(2) $K = 1.28 \times 10^{-16} \text{ J}$

(3) No. $E_n = \Delta V_q$ which is independent of mass

3. (1) $\vec{E} = \frac{\Delta V}{d} = \frac{200}{0.05}$
 $= 4000 \text{ V m}^{-1}$ towards

The negative plate.

(2) ΔV changes to 300V

a) $\therefore \vec{E} \propto \Delta V$

$\therefore \vec{E}$ increases.

b) $\vec{E} \propto \frac{1}{d}$ \therefore double d
 halve \vec{E} .

4. (1) $a = \frac{F}{m} = \frac{Eq}{m}$

$$a = \frac{25000 \times 1.6 \times 10^{-19}}{9.11 \times 10^{-31}}$$

$$= 4.39 \times 10^{15} \text{ m s}^{-2}$$

(2) $V_f = V_0 + at$

$$\therefore 3.0 \times 10^6 = V_0 + 4.39 \times 10^{15} t$$

$$\therefore t = 6.8 \times 10^{-10} \text{ s}$$

5. (1) $\vec{E} = \frac{\Delta V}{d} = \frac{400}{0.1}$
 $= 4000 \text{ V m}^{-1}$

(2) $\vec{F} = \vec{E}q$

$$\therefore F = 4000 \times 1.6 \times 10^{-19}$$

$$= 6.4 \times 10^{-16} \text{ N, to the negative plate.}$$

(3) $a = \frac{F}{m} = \frac{6.4 \times 10^{-16}}{1.673 \times 10^{-27}}$

$$a = 3.8 \times 10^{11} \text{ m s}^{-2}$$

(4) $S = V_0 t + \frac{1}{2} at^2$

$$\therefore S = \frac{1}{2} \times 3.8 \times 10^{11} \times t^2$$

$$\therefore t = \sqrt{\frac{2S}{a}} = \sqrt{\frac{2 \times 0.1}{3.8 \times 10^{11}}}$$

$$t = 7.2 \times 10^{-7} \text{ s}$$

(5) $V_f = V_0 + at = 0 + at$

$$\therefore V_f = 3.8 \times 10^{11} \times 7.2 \times 10^{-7}$$

$$= 2.74 \times 10^5 \text{ m s}^{-1}$$

6. See text

7. (1) $\vec{F} = \vec{E}q = 200 \times 1.6 \times 10^{-19}$

$$F = 3.2 \times 10^{-17} \text{ N to the positive plate}$$

(2) $\vec{E} = \frac{\Delta V}{d} \therefore \Delta V = \vec{E}d$

$$\therefore \Delta V = 200 \times 0.02$$

$$= 4 \text{ Volts}$$

(3) Initial $K = 2.0 \text{ eV}$. As the electron enters the field its kinetic energy converts to potential energy.

$PE = 2.0 \text{ eV}$ when $K = 0$.

K is 2.0 eV when the electron stops. But electron

crosses the plate gains 4.0 eV

\therefore electron stops half way across